




Classifying triangles (equilateral / isosceles / scalene / right)


Grade 4 Geometry Worksheet

Classify the triangles.

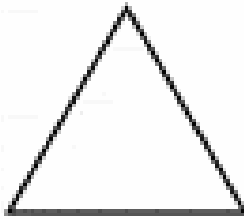
1.




2.



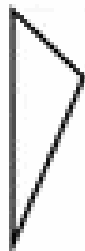
3.




4.



5.



6.



Bonus Questions :)

Convert the decimals into fractions! You can do it!

1. $0.2 = \underline{\hspace{2cm}}$ 2. $4.5 = \underline{\hspace{2cm}}$ 3. $0.31 = \underline{\hspace{2cm}}$ 4. $4.5 = \underline{\hspace{2cm}}$